


Name: _____

How do you locate places on Earth?

1.  **Main Idea and Details:** Complete the chart by writing details that support the main idea.

Main Idea

Latitude and longitude help us locate places.


↑	↑	↑
Detail	Detail	Detail

2. *Recall* Label the compass rose with cardinal directions.



3. *Analyze* Explain how to use **lines of latitude** and **longitude** to identify the **absolute location** of a place.


4. *Evaluate* Use the phrase **line of latitude** to contrast the locations of Los Angeles and San Francisco.

5.  **Write an Informational Paragraph** Where is your school located? Write a paragraph about its location, including the community name and the area of California where it is found.

Link to Math With a partner, take turns choosing a city on the California map. Say the closest latitude and longitude numbers and have your partner find the city.

Name: _____

How do you locate places on Earth?

1.  **Main Idea and Details:** Complete the chart by writing details that support the main idea.

Main Idea

Latitude and longitude help us locate places.


↑	↑	↑
Detail	Detail	Detail

2. *Recall* Label the compass rose with cardinal directions.



3. *Analyze* Explain how to use **lines of latitude** and **longitude** to identify the **absolute location** of a place.


4. *Evaluate* Use the phrase **line of latitude** to contrast the locations of Los Angeles and San Francisco.

5.  **Write an Informational Paragraph** Where is your school located? Write a paragraph about its location, including the community name and the area of California where it is found.

Link to Math With a partner, take turns choosing a city on the California map. Say the closest latitude and longitude numbers and have your partner find the city.

Name: _____

How do you locate places on Earth?

1.  **Main Idea and Details:** Complete the chart by writing details that support the main idea.

Main Idea

Latitude and longitude help us locate places.


↑	↑	↑
Detail	Detail	Detail

2. *Recall* Label the compass rose with cardinal directions.



3. *Analyze* Explain how to use **lines of latitude** and **longitude** to identify the **absolute location** of a place.

4. *Evaluate* Use the phrase **line of latitude** to contrast the locations of Los Angeles and San Francisco.

5.  **Write an Informational Paragraph** Where is your school located? Write a paragraph about its location, including the community name and the area of California where it is found.

Link to Math With a partner, take turns choosing a city on the California map. Say the closest latitude and longitude numbers and have your partner find the city.